



Shapes - Sides

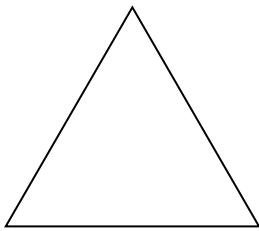
Fill up the blanks.



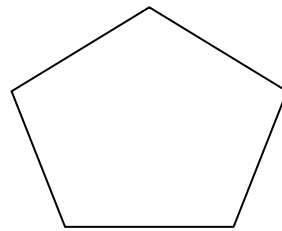
Circle has _____ sides.



Square has _____ sides.



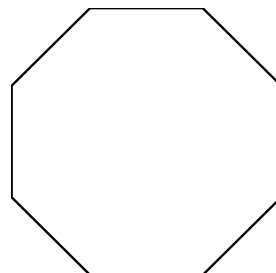
Triangle has _____ sides.



Pentagon has _____ sides.



Rectangle has _____ sides.



Octagon has _____ sides.