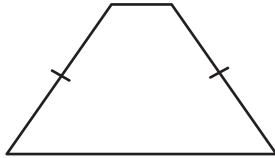
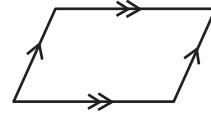


State whether each quadrilateral is a parallelogram.

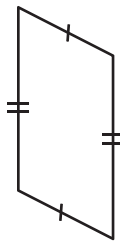
1)




2)



3)



4)



5) PQRS is a quadrilateral with $m\angle P = 99^\circ$, $m\angle Q = 90^\circ$, $m\angle R = 100^\circ$, $m\angle S = 61^\circ$, state whether PQRS is a parallelogram.
