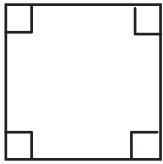


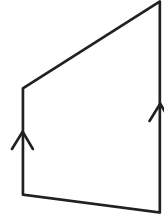
Recognizing Parallelograms

State whether each quadrilateral is a parallelogram.

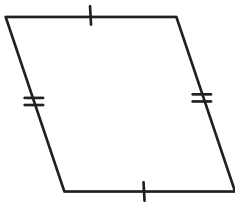
1)



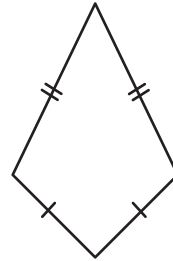
2)



3)



4)



5) WXYZ is a quadrilateral with $WX \parallel YZ$ and $XY \parallel WZ$, state whether WXYZ is a parallelogram.
