

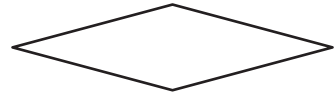
Recognizing Parallelograms

State whether each quadrilateral is a parallelogram.


1)




2)



3)



4)



5)



6)