


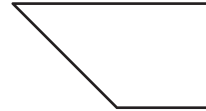
Recognizing Parallelograms

State whether each quadrilateral is a parallelogram.

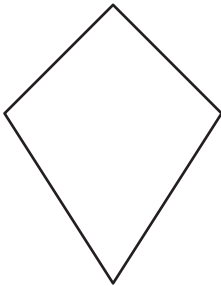
1)



2)



3)



4)



5)



6)

