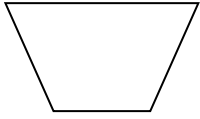


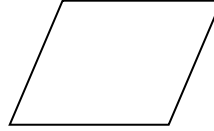
Identifying and Drawing 2D Shapes

WS #2

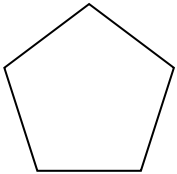
Identify and name each 2D shape.



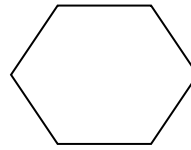
\_\_\_\_\_



\_\_\_\_\_



\_\_\_\_\_



\_\_\_\_\_

Draw 2 trapezoids and 1 pentagon.

Draw 2 parallelograms and 1 hexagon.

Draw 2 hexagons and 1 trapezoid.

Draw 2 pentagons and 2 parallelograms.